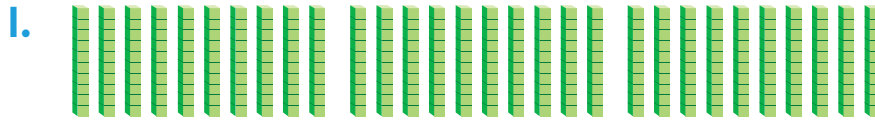




Chapter 2 Review/Test

**Personal Math Trainer**Online Assessment
and Intervention

Do the choices show a way to represent the blocks? Choose Yes or No.

3 hundreds ☐ Yes ☐ No

30 ones ☐ Yes ☐ No

30 hundreds ☐ Yes ☐ No

30 tens ☐ Yes ☐ No

2. Robin has 180 stickers. How many pages of 10 stickers does she need so that she will have 200 stickers in all?

_____ pages of stickers

3. Sanjo has 348 marbles. Harry has 100 fewer marbles than Sanjo. Ari has 10 more marbles than Harry. Write the number of marbles each child has.

_____ Sanjo

_____ Ari

_____ Harry

4. Write the next number in each counting pattern.

214, 314, 414, 514, _____

123, 133, 143, 153, _____

Personal Math Trainer



5. **THINK SMARTER +** Is the comparison true? Choose Yes or No.

$$787 < 769$$

☐ Yes

☐ No

$$405 > 399$$

☐ Yes

☐ No

$$396 > 402$$

☐ Yes

☐ No

$$128 < 131$$

☐ Yes

☐ No

6. **GO DEEPER** Cody is thinking of the number 627.
Write Cody's number in words.

Show Cody's number in two other ways.


Hundreds	Tens	Ones

_____ + _____ + _____

Name _____

7. Matty needs 200 buttons. Amy gives her 13 bags with 10 buttons in each bag. How many buttons does she need now?

_____ buttons



8. There are 4 boxes of 100 sheets of paper and some single sheets of paper in the closet. Choose all the numbers that show how many sheets of paper could be in the closet.


☐ 348

☐ 324

☐ 406

☐ 411

9. Blocks are sold in boxes, in bags, or as single blocks. Each box has 10 bags in it. Each bag has 10 blocks in it. Tara needs 216 blocks. Draw a picture to show a way to buy 216 blocks.



How many boxes, bags, and single blocks did you show?

10. Dan and Hannah collect toy cars. Dan has 132 cars. Hannah has 138 cars. Who has more cars? _____

Dan gets 10 more cars. Hannah gets 3 more cars. Who has more cars now? _____

Draw quick pictures to show how many cars Dan and Hannah have now.

Dan's Cars	Hannah's Cars

-
11. Choose all the numbers that have the digit 2 in the tens place.

- ☐ 721
- ☐ 142
- ☐ 425
- ☐ 239

-
12. Ann has 239 shells. Write the number in words.
- _____